

Towheed Iranian School

INTERNATIONAL SECTION



پیک بهاری

NAME: _____

GRADE 5

Nowruz 1394

والله اعلم بما تصابون والله اعلم بما تصابون

ولی کرامی

سلام علیکم

فراریدن عید سعید نوروز، سرآغاز فصل زیبای بهار را تبریک عرض می‌کنم و از خداوند متعال سالی سرشار از برکات و نعمات الهی و نشاط و سربلندی برایتان آرزو مندم. کارکنان این مجتمع آموزشی مستحضرند که در خدمت نوآموزان و دانش آموزان ایرانی و سایر ملل هستند و برای توسعه ارائه خدمات آموزشی و پرورشی نیازمند حمایت های ایرانیان عزیز مقتیم امارات می باشند. از اینکه این مجتمع آموزشی را به عنوان خانم دوم فرزند خود انتخاب نمودید بر خود می‌بالیم. از خداوند متعال سرافرازی نام ایران و ایرانی را در تمامی عرصه های علمی، فرهنگی و... خواستاریم.



دانش آموز عزیز

سلام

فراریدن عید سعید نوروز را به شما و همه بھکلاسی های عزیزتان تبریک می‌گویم و از خداوند مهربان سالی همراه با تندرستی و موفقیت در امور تحصیلی و تربیتی برایتان مسلت می‌نمایم.

امیدوارم در این مجتمع آموزشی روزه روز شاد کسب افتخارات برای ایران و ایرانیان عزیز باشیم.

علی سربالی

مدیر مجتمع آموزشی نمونه و بین الملل توحید پسران دبی

اللهم صل علی فاطمة الزهراء

سال نوبارک ...



هفت سین قرآنی

سلام قولا من رب الرحيم

سلام علي نوح في العالمين

سلام علي ابراهيم

سلام علي آل ياسين



سلام علي موسي و هارون

سلام هي حتي مطلع الفجر

سلام عليكم طبتهم فادخلوها خالدین

میخواهم امام زمان عج را نقاشی کنم. نمی‌دانم امام گل است؟ آیا نور است؟ به امام فکر می‌کنم که از گل بهتر است. او از نور روشن‌تر است.



بانوی مهربان...

این گل پرپر شده

دختر پیغمبره

جاش تو بهشت خدا


از همه بالاتره

شاعر: شکوه قاسم نیا



۱۳۹۴

سال نو مبارک



در باره ی من

نام من انست. من خاتش آموز کلاس هستم.

من در شهر زندگی می کنم.

در مدرسه ی درس می خوانم. نام آموزگار من است.

سالن توام با شادی ، نشاط و سلامت برایتان آرزو مندیم





بهار در اندیشه شعرا

نوبهار است در آن کوش که خوشدل باشی که بسی گل بدمد باز و تو در گل باش

(حافظ)

خاک شو تا گل بر آبی رنگ رنگ

در بهاران کی شود سرسبز سنگ؟

آزمون را یک زمانی خاک باش

سالها تو سنگ بودی دلخراش

(مولانا)



افعال بیت اول را مشخص کن:

می توانی در مورد مولانا شاعر گرانقدر ایرانی دو سطر بنویسی:



به کمک بزرگترها در این صفحه املایی بنویس.
 از درس های: تونیک می کن و سآریو برزن، طوفان نوح و کتاب های مرجع

.....

.....

.....

.....

.....


.....

.....

.....

.....

.....



نمره من

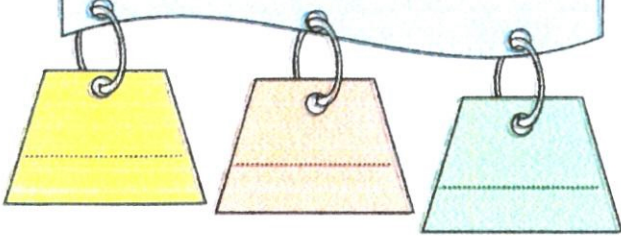


ضرب المثل شتری :

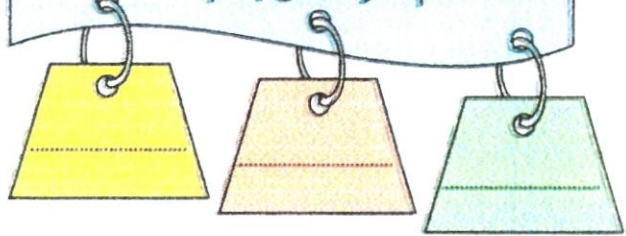
.....



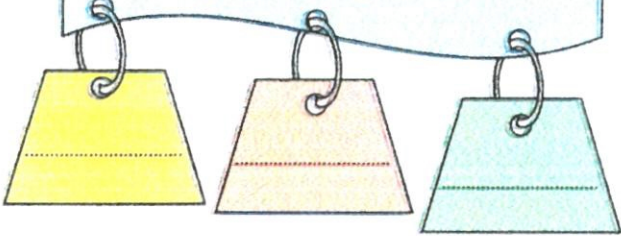
هم خانواده های اُتس



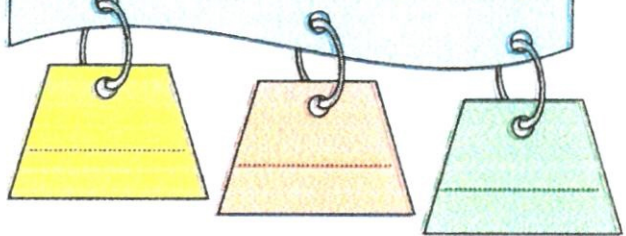
هم خانواده های جَدَاب



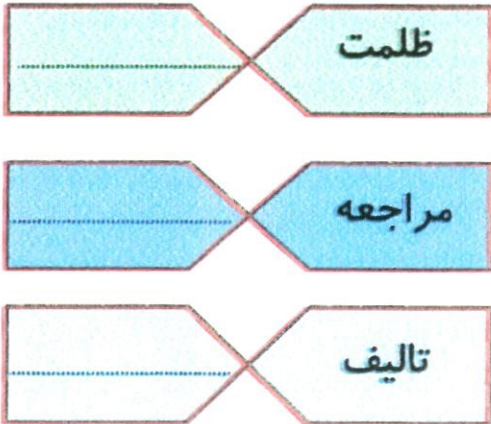
صفات از متن تیریک اول پیک



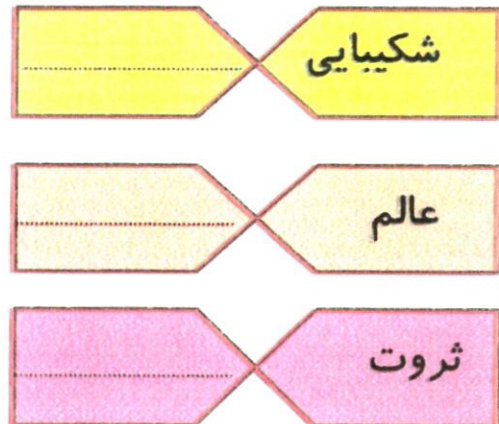
مهم ترین کلماتی که در طول سال در املا اشتباه داشتی



مترادف کلمات



مخالف کلمات



به یکی توپ فوتبال رو نشون دادن میگن این پیه؟
جواب میده: شطرنج کرد !!!!!!!



آفرین دانش آموز خوبم
خدا قوت.....



تحویل



نوروز



قران



سفره



امروز آخر اسفند است و من.....

.....

.....

.....

.....

.....

.....

.....

.....

.....



هر کلمه را در جای مناسب بنویس.

آرامی - بوستان - محکم - دبستان - پنهان - فردا - لجاجت - زیر - آهنگر - سیمین - تند تند - دردناک - غروشان

صفت	کلمات مرکب	قید
.....
.....
.....

از درسهایی که خوانده ای از آنهایی که شماره فرد هستند باز هر درس یک جمله دارای مفعول انتخاب کن و بنویس

درس	جمله	مفعول	فعل جمله

آفرین گل من



جملات زیر را بخوان و سپس موارد خواسته شده را در جدول بنویس

۱- بچه ها فردا به پارکی زیبا خواهند رفت.

۲- رازی پزشک بلند آوازه ی ایرانی گوشت ها را بررسی کرد.

جمله	نهاد	قید	صفت	مفعول	فعل	زمان	شخص
۱							
۲							





Nowruz Home Work

English

تکلیف نوروزی انگلیسی

Grade 5

A book named **Bravo** has been given to students. They should work in accordance with the explanation given by the teacher in the class.

پیک نوروزی پایه پنجم ، کتاب Bravo برای تکلیف انگلیسی در نظر گرفته شده است که آموزگار مربوطه توضیحات لازم را به طور شفاهی به دانش آموزان یادآوری کرده است .

Add and subtract the following fractions (show your work)

A) $\frac{6}{5} - \frac{3}{5} =$

B) $\frac{12}{18} + \frac{10}{9} =$

C) $\frac{7}{16} - \frac{4}{8} =$

D) $\frac{12}{11} - \frac{4}{11} =$

E) $\frac{9}{4} + \frac{5}{12} =$

F) $\frac{11}{2} + \frac{4}{5} =$

G) $\frac{6}{9} + \frac{10}{11} =$

H) $\frac{3}{11} + \frac{12}{7} =$

Multiply and divide :

1. $0.7 \times 7 =$ _____

5. $0.08 \times 9 =$ _____

2. $1.1 \times 3 =$ _____

6. $7 \times 0.6 =$ _____

3. $0.88 \div 4 =$ _____

7. $0.48 \div 4 =$ _____

4. $0.81 \div 3 =$ _____

8. $0.96 \div 2 =$ _____

Simplify the following fractions

1. $\frac{3}{18}$

3. $\frac{18}{28}$

2. $\frac{3}{33}$

4. $\frac{10}{22}$

Fill in the blanks to make equivalent fractions

1. $\frac{60}{4} = \frac{15}{\quad}$

4. $\frac{\quad}{12} = \frac{1}{1}$

2. $\frac{2}{1} = \frac{\quad}{3}$

5. $\frac{57}{12} = \frac{19}{\quad}$

3. $\frac{7}{7} = \frac{1}{\quad}$

6. $\frac{1}{1} = \frac{17}{\quad}$

Problem solving :

1. Ellen had 12,080 Legos, but she lost 417 Legos. How many Legos does she have now?

2. Arthur baked 115 muffins, which was 17 more muffins than Ann. How many muffins did Ann bake?

3. In the summertime, you can earn \$4 a day by cutting the grass. How many days will it take you to earn \$184?

4. A company donates 935 pencils to a school. The pencils are divided evenly among 9 classrooms. The rest of the pencils are given to the library. How many pencils were donated to the school and to the library?

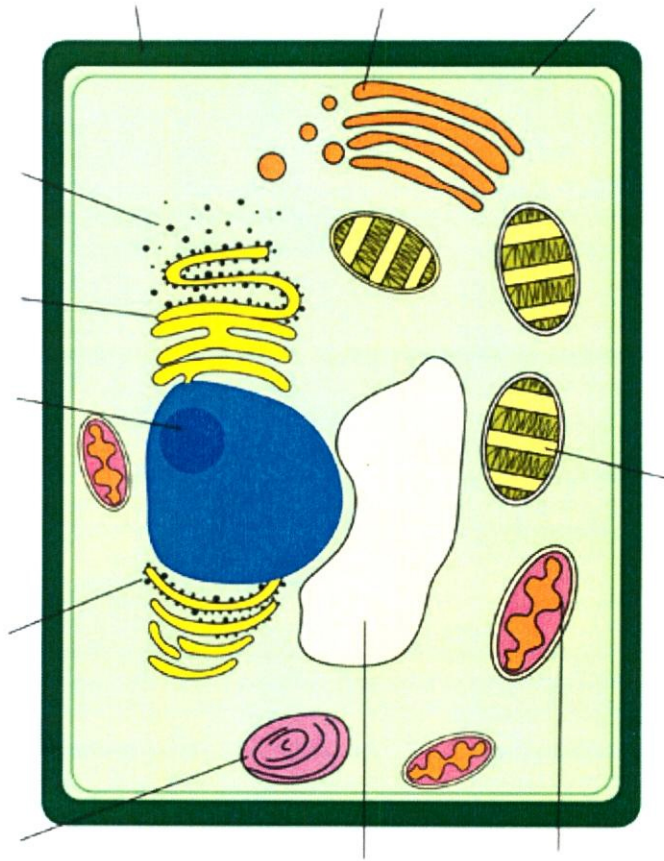
5. Manny owns 83 sets of basketball cards. Each set has exactly 504 cards. What is the total number of basketball cards Manny owns?

6. Johnny makes \$4.75 per hour at his work. If he works 6 hours, how much money will he earn? 1. Johnny makes \$4.75 per hour at his work. If he works 6 hours, how much money will he earn?



Cells of a Plant

Label the diagram of a plant cell below.





CRYPTIC PLANETS

Here are some facts about planets, but which planets are those? Fill in the gaps to identify the planet.

(Find the answers at the bottom of the page.)

1. This planet is closest to the sun.
__ R __ R __
2. This is the brightest planet in the Solar System and can be seen even during the day.
__ E __ U __
3. This is the only planet to have liquid water on its surface.
__ A __ T __
4. This planet gets its special color because of the presence of oxide on it.
__ A __
5. This planet is named after an ancient Roman sky-god.
__ U __ T __ R
6. This planet is surrounded by rings (probably) made of ice.
S __ U __
7. This planet cannot be seen from the earth without a telescope.
__ R __ U __
8. This planet is named after the Roman sea-god.
__ E __ T __ N __
9. This is the second smallest planet in the Solar System.
__ L __ T __

© 2011 Knowledge Adventure, Inc. All rights reserved.

PLANETS



SCIENCE VOCAB QUIZ

Each scientific term has its own definition. Write the term that best matches the definition in the space below.

(Find the answers at the bottom of the page.)

1. Anything that occupies space and has mass:

2. The amount of space taken up by an object:

3. The gravitational pull of an object:

4. The concentration of matter inside an object:

5. The degree of heat inside the molecules of an object:

6. The vibrations that travel through a medium (such as air) and can be heard by the ear:

Answers: 1. Matter 2. Volume 3. Weight 4. Density 5. Temperature 6. Sound




METALS VS. NON-METALS

Each statement describes either a metal or a non-metal. Circle the right answer.

1. I shine when I am polished.	Metal / Non-metal
2. I am a bad conductor of electricity.	Metal / Non-metal
3. You will mostly find me in gaseous form at room temperature.	Metal / Non-metal
4. I am a good conductor of heat.	Metal / Non-metal
5. Most matter in the universe is made up of me.	Metal / Non-metal
6. Most of the known elements are made of me.	Metal / Non-metal
7. You will mostly find me in solid form at room temperature.	Metal / Non-metal
8. I never shine when I am polished.	Metal / Non-metal

The Basic Parts of all Living Things

What are plants made up of? What are animals made up of? Every living thing is made up of smaller parts. The smaller parts have different functions, but all of the parts work together to allow the individual to live and survive in its environment. The smaller parts are made of even smaller parts, until you reach the smallest part of all, the Cell. Cells are the basic building blocks of all living things.



Most living things are made up of more than one cell. You are a multi-celled organism, along with animals, and plants. **Multi-Celled** organisms are visible with a naked eye. However, some living things in the world have just one cell. These organisms are called **Single-Celled Organisms**. These types of organisms are not visible with only our eyes. In order to see single-celled organisms, we need a microscope. In single-celled organisms, the single cell must work alone, so it has to do everything to make sure that the organism survives. Bacteria is an example of a single celled organism. Single-celled organisms can still eat, rid themselves of waste and reproduce.

Multi-celled organisms are more complex. Different parts have different functions, each part sharing the work and cooperating to make sure that the organism survives. In a plant (multi-celled organism), for example, the cells working together in the roots make sure that the plant gets the water and nutrients from the soil that the plant needs to survive. The cells working together in the leaves make sure that the plant exchanges oxygen for the carbon dioxide that the plant needs to survive. The roots and the leaves work together as a system for the plant to survive.

Therefore, we can conclude that **Cells** are the basic units of life. They are the smallest parts of a living organism that can lead an independent existence. Individually, or in association with other cells, they make up the bodies of all living things.



The Basic Parts of all Living Things Writing Activity

1. What are multi-celled organisms?

2. What are single-celled organisms?

3. What is the building block of all living things? Why is it called a building block?

4. Why are single-celled organisms not visible with a naked eye? What do we need to see these organisms?



Multiple Choice Questions

1. Which of the following is a constituent of eco-system?
 - a) Plants
 - b) Birds
 - c) Animals
 - d) All of these

2. What kind of Eco-system is known as sustainable?
 - a) The one in which all species are in balance
 - b) The one in which there are no animals
 - c) The one in which animals feed on each other
 - d) All of these

3. An Eco-System comprises of
 - a) Living organisms
 - b) Non-living organisms
 - c) Both living and non-living organisms
 - d) Only plants

4. Which of the following statement is TRUE?
 - a) Eco-Systems may vary in size
 - b) Eco-Systems are always very large
 - c) Eco-Systems are always very small.
 - d) None of these is true.

5. If one part of Eco-System is damaged, what happens?
 - a) It doesn't have any impact on the Eco-system
 - b) It completely destroys the eco-system
 - c) It has an impact on everything else in the eco-system
 - d) All of these



Social study

Draw sofreh Haftseen and explain in 3sentences that which part of Nowruz is special for you .
